



Nama: _____

Pengurangan Sayur-sayuran


Coba hitung pengurangan di bawah ini!



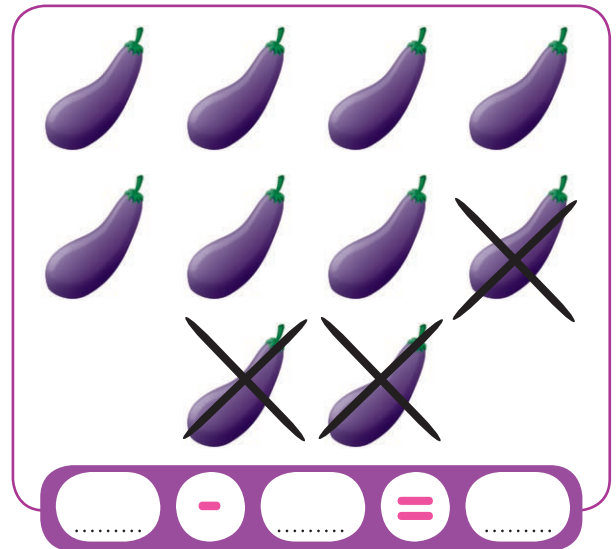
A box containing two rows of cabbages. The top row has 3 cabbages. The bottom row has 4 cabbages, with the last two crossed out with an 'X'. Below the cabbages is a subtraction template: $\square - \square = \square$.




A box containing two rows of broccoli. The top row has 4 broccoli. The bottom row has 4 broccoli, with the first, second, and third ones crossed out with an 'X'. Below the broccoli is a subtraction template: $\square - \square = \square$.



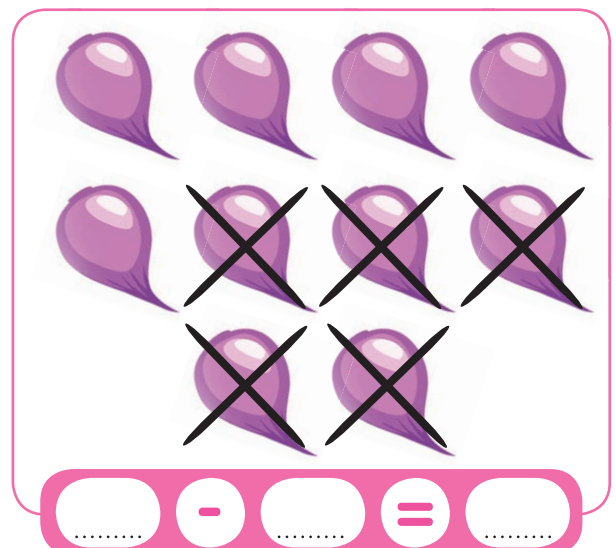
A box containing three rows of carrots. The top row has 3 carrots. The middle row has 3 carrots, with the last two crossed out with an 'X'. The bottom row has 3 carrots, with all three crossed out with an 'X'. Below the carrots is a subtraction template: $\square - \square = \square$.



A box containing two rows of eggplants. The top row has 4 eggplants. The bottom row has 4 eggplants, with the last two crossed out with an 'X'. Below the eggplants is a subtraction template: $\square - \square = \square$.



A box containing three rows of potatoes. The top row has 3 potatoes. The middle row has 3 potatoes. The bottom row has 3 potatoes, with all three crossed out with an 'X'. Below the potatoes is a subtraction template: $\square - \square = \square$.



A box containing two rows of onions. The top row has 4 onions. The bottom row has 4 onions, with the last three crossed out with an 'X'. Below the onions is a subtraction template: $\square - \square = \square$.